

TELLING TIME A1-

1. Match the numbers.

0 1 3 6 7 12 15 21 46

six twenty-one three zero twelve forty-six fifteen seven one


2. Write the numbers.

| | | | |
|---------|--------------------------|-------------|-------|
| two | ² | seventeen | |
| five | | eighty | |
| eight | | fifty-seven | |
| eleven | | sixty-four | |
| sixteen | | seventy-one | |

3. Write the numbers.

| | | | |
|----|-------------------------|-----|-------|
| 4 | <i>four</i> | 14 | |
| 9 | | 23 | |
| 10 | | 33 | |
| 13 | | 39 | |
| 18 | | 54 | |
| 19 | | 76 | |
| 30 | | 82 | |
| 73 | | 90 | |
| 95 | | 100 | |

4. Read the times.



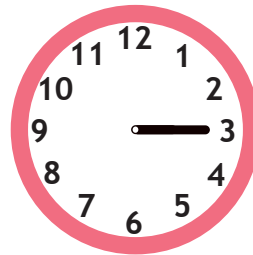
3:00 PM

Three o'clock



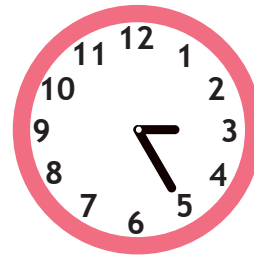
3:05 PM

Five past three




3:15 PM

Quarter past three



3:25 PM

Twenty-five past three



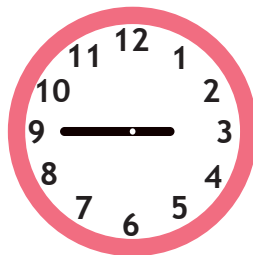
3:30 PM

Half past three




3:35 PM

Twenty-five to four



3:45 PM


Quarter to four



3:55 PM

Five to four

5. Select the correct time.



- Four o'clock
- Twenty past twelve
- Twelve past four



- Nine past one
- Five past nine
- Quarter to two



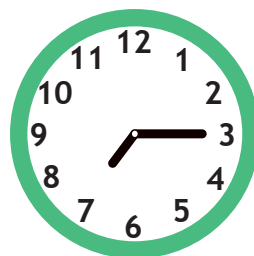
- Twelve past five
- Five o'clock
- Twenty-five past twelve



- Eleven past six
- Half past eleven
- Five to seven



- Twenty to eleven
- Ten past eight
- Ten to nine



- Twenty-five to four
- Seven past three
- Quarter past seven



- Two past two
- Ten past two
- Two o'clock




- Six past eight
- Half past eight
- Twenty to seven

6. Write the times.




10:20 AM

..... *Twenty* past ten




11:50 AM

..... to twelve



6:30 PM

Half past




9:55 PM

..... to ten



5:15 AM

..... past five




1:25 PM

Twenty-five past



2:05 PM

..... past two



7:45 AM

Quarter to

7. Write the times in order.

4:10 PM **past four ten**

Ten past four
.....

9:30 AM **past nine half**

.....

2:55 AM **to five three**

.....

7:25 PM **seven twenty-five past**

.....

12:40 PM **one to twenty**

.....

6:05 AM **six five past**

.....

8:50 AM **ten nine to**

.....

3:45 PM **four to quarter**

.....


1:35 AM **to twenty-five two**

.....

11:05 PM **eleven past five**

.....


8. Listen and draw the correct time, then write it.



Five past two
.....


2 : 25 AM
.....

Twenty-five past two
.....




.....







..... :



.....



.....



9. Game!